




an ATM card



a credit card



a check



a twenty-dollar bill



a ten-dollar bill



a five-dollar bill



a one-dollar bill



a half-dollar



a quarter



a dime



a nickel




a penny

Lesson D Reading


Matching

- A** Work with a partner. Cut out the cards.
- B** Turn the cards face down.
- C** Turn two cards over at a time. Match the words with the pictures.

Example

		one-dollar bill	
			

no

one-dollar bill	

yes

a one-dollar bill a quarter two half-dollars	a half-dollar a twenty-dollar bill two quarters
a half-dollar a quarter four dimes one nickel	a ten-dollar bill one penny three dimes
a one-dollar bill four nickels six pennies	a five-dollar bill a half-dollar a quarter five pennies
a dime a penny three nickels two quarters	a dime a ten-dollar bill two nickels two quarters
a twenty-dollar bill four pennies three quarters	a dime a five-dollar bill two nickels two quarters
a ten-dollar bill four pennies three dimes	a dime a one-dollar bill three pennies two quarters

Lesson **D** *Reading*

Matching (continued)

A matching exercise grid with 12 cells. Each cell contains a US dollar bill and several US coins (quarters and dimes). The bills are: 1 dollar, 20 dollar, 10 dollar, 5 dollar, 10 dollar, 5 dollar, 10 dollar, and 1 dollar. The coins are quarters and dimes. A large 'FOOTNOTED ONLY' watermark is overlaid diagonally across the grid.

Photocopiable

© Cambridge University Press 2014

I have 2 quarters. How many nickels is that?	I have 2 quarters. How many nickels is that?	I have 2 quarters. How many nickels is that?	I have 2 quarters. How many nickels is that?	I have 2 quarters. How many nickels is that?
I have 1 dime. How many nickels is that?	I have 1 dime. How many nickels is that?	I have 1 dime. How many nickels is that?	I have 1 dime. How many nickels is that?	I have 1 dime. How many nickels is that?
I have 20 pennies. How many dimes is that?	I have 30 pennies. How many dimes is that?	I have 30 pennies. How many dimes is that?	I have 30 pennies. How many dimes is that?	I have 30 pennies. How many dimes is that?
I have 20 dimes. How many dollar bills is that?	I have 20 dimes. How many dollar bills is that?	I have 20 dimes. How many dollar bills is that?	I have 20 dimes. How many dollar bills is that?	I have 20 dimes. How many dollar bills is that?
I have 5 pennies, 1 nickel and 4 dimes. How many quarters is that?	I have 5 pennies, 1 nickel and 4 dimes. How many quarters is that?	I have 5 pennies, 1 nickel and 4 dimes. How many quarters is that?	I have 5 pennies, 1 nickel and 4 dimes. How many quarters is that?	I have 5 pennies, 1 nickel and 4 dimes. How many quarters is that?
I have 8 nickels. How many pennies bills is that?	I have 8 nickels. How many pennies bills is that?	I have 8 nickels. How many pennies bills is that?	I have 8 nickels. How many pennies bills is that?	I have 8 nickels. How many pennies bills is that?